

Please print:

Last name: \_\_\_\_\_

First name: \_\_\_\_\_

## **Chem 1061 Exam 3**

**Fall 2004**

**Andy Aspaas, Instructor**

**Tuesday, November 9, 2004**

### **Instructions:**

**Time:** You have 85 minutes to complete this exam.

**Allowed items:** This exam will require the use of a calculator. A calculator and your writing instrument are the only personal items allowed on your table while the exam is being administered. A #2 pencil is required to fill out the Scantron form for the multiple choice questions. Please use pen on the problems section of the exam if you would like the opportunity for regrades beyond simple score-addition errors.

**Provided information:** A periodic table and conversion chart are provided for you inside this exam booklet.

### **Contents:**

**I. Multiple choice,** 12 questions, 3 points each.

36 points

**II. Problems.** 4 questions, 16 points each.

64 points

**Total: 100 points**

I, \_\_\_\_\_ have read and understand the directions given above, and pledge that I will follow all regulations with regard to Academic Dishonesty as outlined by this college when taking this exam.

Signature \_\_\_\_\_ Date and Time \_\_\_\_\_

**I. Multiple choice**

Choose the best answer from the choices given, and mark your choice on the provided Scantron sheet with a #2 pencil. (3 points each)

1. Equal volumes of propane,  $C_3H_8$  and carbon monoxide at the same temperature and pressure have the same
  - I. density
  - II. number of molecules
  - III. number of atoms
  - a. I only
  - b. II only
  - c. III only
  - d. I and II only
  - e. I, II, and III
2. In an ideal gas, which pairs of variables are inversely proportional to each other (if all other factors remain constant)?
  - I.  $P, T$
  - II.  $P, V$
  - III.  $V, T$
  - IV.  $n, V$
  - a. I and II only
  - b. III and IV only
  - c. II only
  - d. I and III only
  - e. I, III, and IV only
3. The pressure of 4.0 L of nitrogen in a flexible container is decreased to one-half its original pressure, and its absolute temperature is increased to double the original temperature. The volume is now
  - a. 2.0 L
  - b. 4.0 L
  - c. 8.0 L
  - d. 16.0 L
  - e. 32.0 L
4. An empty 2.0 L soda bottle is tightly capped at 22 °C and 650 mmHg. If the bottle is placed in water at 95 °C, what is the pressure in the bottle?
  - a. 520 mmHg
  - b. 780 mmHg
  - c. 810 mmHg
  - d. 930 mmHg
  - e. 2800 mmHg

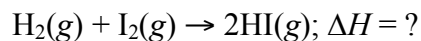
5. If 250 mL of methane,  $\text{CH}_4$ , effuses through a small hole in 48 s, the time required for the same volume of helium to pass through the hole will be
- 12 s
  - 24 s
  - 48 s
  - 96 s
  - 192 s
6. For the process of ice melting to form liquid water, which of the following is true?
- $\Delta H$  is positive, and the process is exothermic
  - $\Delta H$  is positive, and the process is endothermic
  - $\Delta H$  is negative, and the process is exothermic
  - $\Delta H$  is negative, and the process is endothermic
  - Not enough information given
7. Which of the following statements is (are) true?
- The reaction vessel becomes warmer when an endothermic reaction occurs.
  - An exothermic reaction is characterized by a negative value of  $\Delta H$ .
  - Heat is evolved when an exothermic reaction occurs.
- I only
  - II only
  - I and II only
  - II and III only
  - I, II, and III
8. Consider the following specific heats of metals:

<u>Metal</u>	<u>Specific heat</u>
copper	0.385 J/(g $\cdot$ $^{\circ}\text{C}$ )
cobalt	0.418 J/(g $\cdot$ $^{\circ}\text{C}$ )
chromium	0.447 J/(g $\cdot$ $^{\circ}\text{C}$ )
gold	0.129 J/(g $\cdot$ $^{\circ}\text{C}$ )
silver	0.237 J/(g $\cdot$ $^{\circ}\text{C}$ )

- 100-g samples of each of the metals at 95  $^{\circ}\text{C}$  are added to 100 mL of water at 25  $^{\circ}\text{C}$ . Which element will increase the temperature of the water the least?
- copper
  - cobalt
  - chromium
  - gold
  - silver

9. In a coffee-cup calorimeter, reactions are carried out
- At constant temperature
  - At constant volume
  - At constant pressure
  - At standard temperature and pressure
  - None of these
10. The  $\Delta H_f^\circ$  of  $\text{Cr}_2\text{O}_3(s)$  is  $-1134.7 \text{ kJ/mol}$ . Which of the following thermochemical equations is correct?
- $4\text{Cr}(s) + 3\text{O}_2(g) \rightarrow 2\text{Cr}_2\text{O}_3(s); \Delta H = -1134.7 \text{ kJ}$
  - $2\text{Cr}(s) + \frac{3}{2}\text{O}_2(g) \rightarrow \text{Cr}_2\text{O}_3(s); \Delta H = -1134.7 \text{ kJ}$
  - $\text{Cr}_2(s) + \text{O}_3(g) \rightarrow \text{Cr}_2\text{O}_3(s); \Delta H = -1134.7 \text{ kJ}$
  - $2\text{Cr}(s) + 3\text{O}(g) \rightarrow \text{Cr}_2\text{O}_3(s); \Delta H = -1134.7 \text{ kJ}$
  - None of the above are correct.
11. For which substance is  $\Delta H_f^\circ = 0$ ?
- $\text{C}_2\text{H}_6(g)$
  - $\text{C}_2\text{H}_6(l)$
  - $\text{Br}_2(s)$
  - $\text{Br}_2(l)$
  - $\text{Br}_2(g)$
12. The standard enthalpies of formation for various iodine species are given below:
- $\text{I}(g) \quad \Delta H_f^\circ = 107 \text{ kJ/mol}$   
 $\text{I}_2(g) \quad \Delta H_f^\circ = 21 \text{ kJ/mol}$   
 $\text{HI}(g) \quad \Delta H_f^\circ = 26 \text{ kJ/mol}$

What other additional information is needed to calculate the enthalpy of the following reaction?

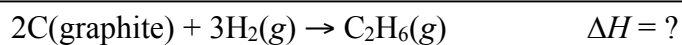
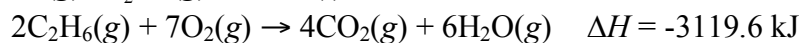

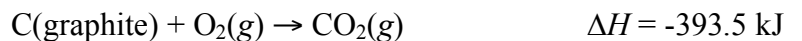


- none, because the answer is 2 times 26 kJ/mol
- none, because the enthalpy of formation of an element in its stablest form is zero
- the enthalpy of formation of gaseous iodine
- the enthalpy of formation of gaseous hydrogen
- the enthalpy of formation of solid iodine

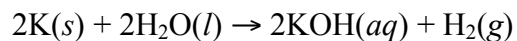
**II. Problems**

For all problems, show your work and round the final answer to the correct number of significant figures for full credit. Place a box around your final answer. (16 points each)

13. Given the following thermochemical equations, use Hess's law to calculate the  $\Delta H_f$  of  $C_2H_6$ .



14. A piece of potassium metal undergoes complete reaction with water as follows:



The hydrogen gas is collected over water at 25 °C. The volume of gas is 752 mL measured at 0.950 atm. Calculate the number of grams of potassium used in this reaction, assuming excess water. (The vapor pressure of water at 25 °C is 0.0313 atm)

15. An ideal gas with a density of 0.626 g/L is placed in a 1.5 L flask at 25 °C. If the pressure of the gas is 0.899 atm, what is the molecular weight, in amu, of this gas?

16. 0.20 moles of HCl were neutralized by NaOH. The concentrations of base and acid were equal. If the temperature of the water in the calorimeter increased from 19.9 °C to 24.6 °C, what was the original concentration of HCl? The molar enthalpy of neutralization is -80 kJ/mole acid, signified by the below thermochemical equation.



Assume the density of water is 1.00 g/mL, and that all the heat of the neutralization reaction is absorbed by the surrounding water only. The specific heat of water is 4.184 J/g°C.



**--END OF EXAM QUESTIONS--**